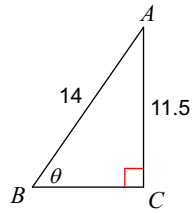
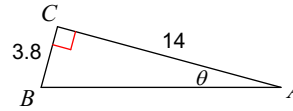


Find the measure of each angle indicated. Round to the nearest tenth.

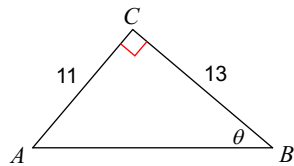
1)



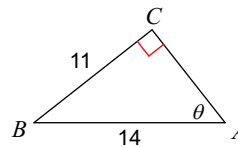
2)



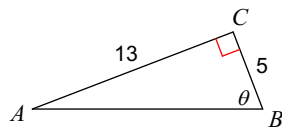
3)



4)



5)



Find the measure of each side indicated. Round to the nearest tenth.

