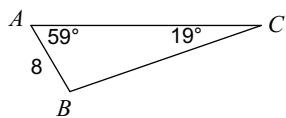


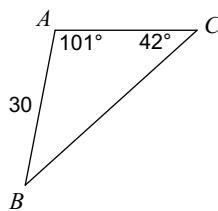
# Law of Sines and Cosines

**Find each measurement indicated. Round your answers to the nearest tenth.**

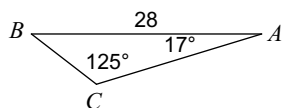
1) Find BC



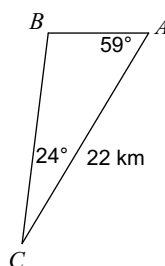
2) Find BC



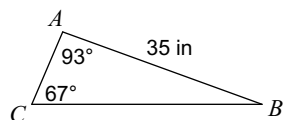
3) Find BC



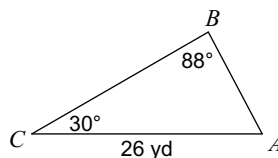
4) Find BC



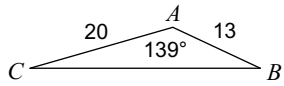
5) Find BC



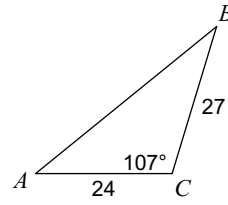
6) Find AB



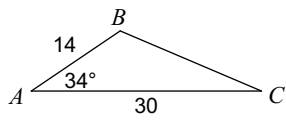
7) Find BC



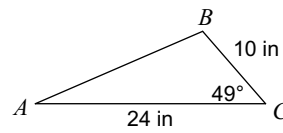
8) Find AB



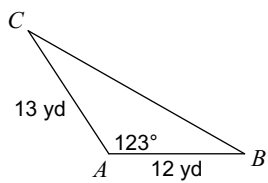
9) Find BC



10) Find AB



11) Find BC



12) Find AC

