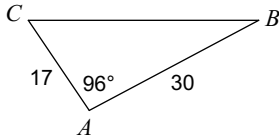
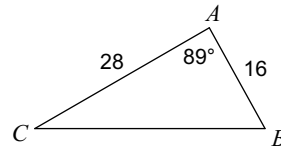
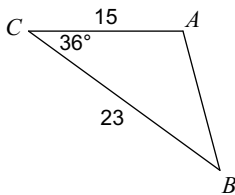
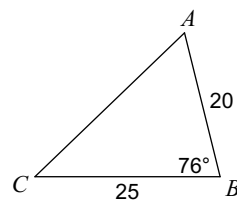
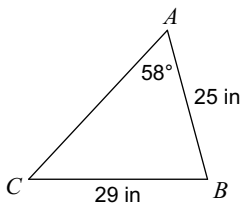
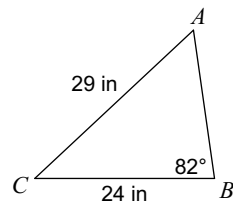
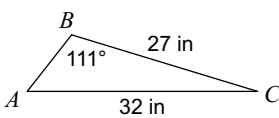


Assignment

Date _____ Period _____

Find each measurement indicated. Round your answers to the nearest tenth.

1) Find $m\angle B$ 2) Find $m\angle B$ 3) Find $m\angle A$ 4) Find $m\angle C$ 5) Find $m\angle C$ 6) Find $m\angle A$ 7) Find $m\angle A$ 8) Find $m\angle B$ 